
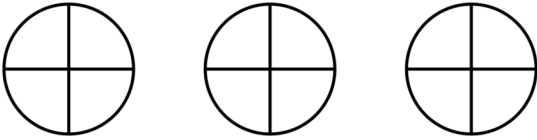
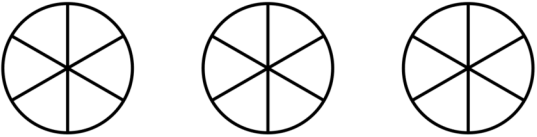

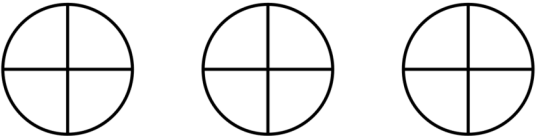


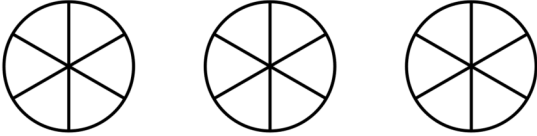
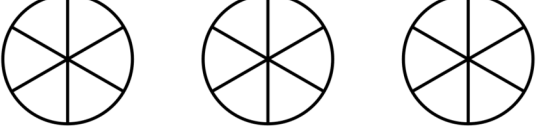
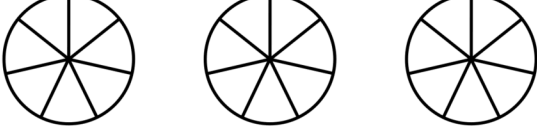


Date: _____

Name: _____

Adding Fractions - Sheet 1

Shade and add each pair of fractions. The first one is done for you.

<p>1) </p> $\frac{1}{3} + \frac{1}{3} = \frac{2}{3}$	<p>2) </p> $\frac{1}{4} + \frac{2}{4} = \frac{3}{4}$
<p>3) </p> $\frac{4}{6} + \frac{1}{6} = \frac{5}{6}$	<p>4) </p> $\frac{2}{5} + \frac{1}{5} = \frac{3}{5}$
<p>5) </p> $\frac{1}{4} + \frac{1}{4} = \frac{2}{4} = \frac{1}{2}$	<p>6) </p> $\frac{1}{7} + \frac{2}{7} = \frac{3}{7}$
<p>7) </p> $\frac{2}{5} + \frac{2}{5} = \frac{4}{5}$	<p>8) </p> $\frac{2}{6} + \frac{3}{6} = \frac{5}{6}$
<p>9) </p> $\frac{1}{6} + \frac{3}{6} = \frac{4}{6} = \frac{2}{3}$	<p>10) </p> $\frac{3}{7} + \frac{2}{7} = \frac{5}{7}$