
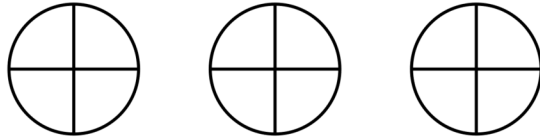
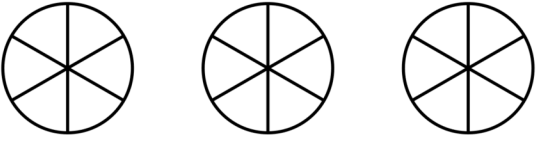

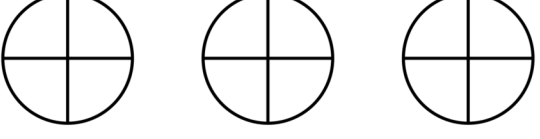

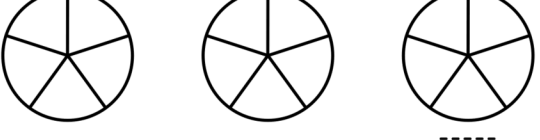
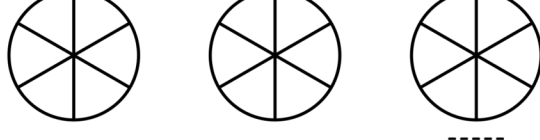
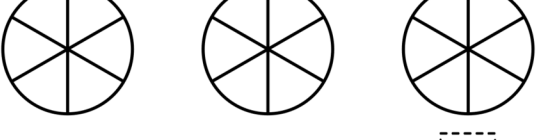



Date: _____

Name: _____

Adding Fractions - Sheet 1

Shade and add each pair of fractions. The first one is done for you.

1)  $\frac{1}{3} + \frac{1}{3} = \frac{2}{3}$	2)  $\frac{1}{4} + \frac{2}{4} = \frac{\quad}{\quad}$
3)  $\frac{4}{6} + \frac{1}{6} = \frac{\quad}{\quad}$	4)  $\frac{2}{5} + \frac{1}{5} = \frac{\quad}{\quad}$
5)  $\frac{1}{4} + \frac{1}{4} = \frac{\quad}{\quad}$	6)  $\frac{1}{7} + \frac{2}{7} = \frac{\quad}{\quad}$
7)  $\frac{2}{5} + \frac{2}{5} = \frac{\quad}{\quad}$	8)  $\frac{2}{6} + \frac{3}{6} = \frac{\quad}{\quad}$
9)  $\frac{1}{6} + \frac{3}{6} = \frac{\quad}{\quad}$	10)  $\frac{3}{7} + \frac{2}{7} = \frac{\quad}{\quad}$