



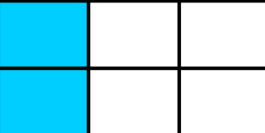
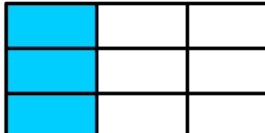







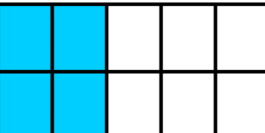
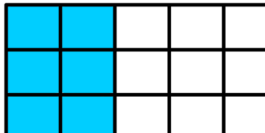








Date: _____

Name: _____

Create Equivalent Fractions: Sheet 4

Create equivalent fractions in each row. Shade the models and fill in the missing numerators. The first one has been done for you.

1)		$\frac{1}{2}$		$\frac{2}{4}$		$\frac{3}{6}$
2)		$\frac{1}{3}$		$\frac{2}{6}$		$\frac{3}{9}$
3)		$\frac{3}{4}$		$\frac{6}{8}$		$\frac{9}{12}$
4)		$\frac{2}{3}$		$\frac{4}{6}$		$\frac{6}{9}$
5)		$\frac{2}{5}$		$\frac{4}{10}$		$\frac{6}{15}$
6)		$\frac{1}{4}$		$\frac{2}{8}$		$\frac{3}{12}$
7)		$\frac{4}{5}$		$\frac{8}{10}$		$\frac{12}{15}$