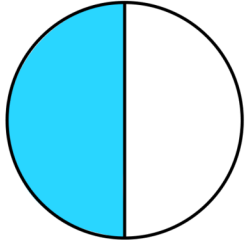
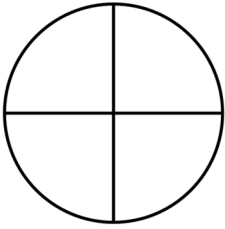

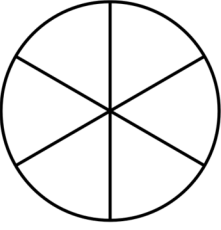
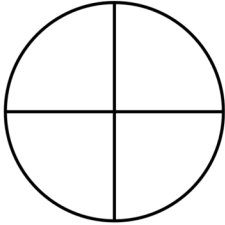
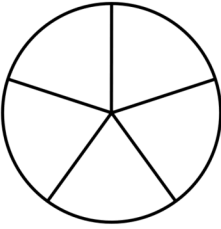
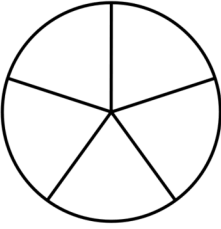

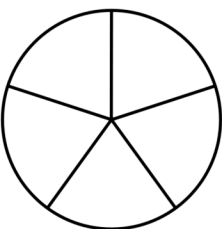
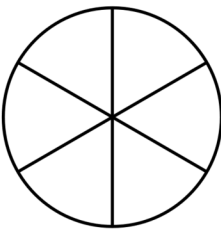


Date: _____

Name: _____

Fractions

Color in sections of the circle to represent the fraction. The first one is done for you.

1)  $\frac{1}{2}$	2)  $\frac{1}{4}$
3)  $\frac{2}{3}$	4)  $\frac{2}{6}$
5)  $\frac{3}{4}$	6)  $\frac{3}{5}$
7)  $\frac{2}{5}$	8)  $\frac{1}{3}$
9)  $\frac{4}{5}$	10)  $\frac{5}{6}$