










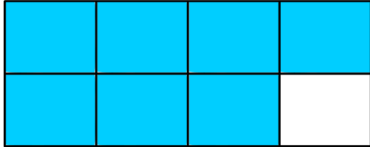


Date: _____

Name: _____

Visualizing & Writing Fractions - Sheet 2

Write the shaded portion as a fraction.

1)  <table border="1" data-bbox="690 437 764 582"><tr><td>1</td></tr><tr><td>4</td></tr></table>	1	4	2)  <table border="1" data-bbox="1333 437 1408 582"><tr><td></td></tr><tr><td></td></tr></table>		
1					
4					
3)  <table border="1" data-bbox="690 700 764 845"><tr><td></td></tr><tr><td></td></tr></table>			4)  <table border="1" data-bbox="1333 700 1408 845"><tr><td></td></tr><tr><td></td></tr></table>		
5)  <table border="1" data-bbox="690 948 764 1094"><tr><td></td></tr><tr><td></td></tr></table>			6)  <table border="1" data-bbox="1333 948 1408 1094"><tr><td></td></tr><tr><td></td></tr></table>		
7)  <table border="1" data-bbox="690 1207 764 1353"><tr><td></td></tr><tr><td></td></tr></table>			8)  <table border="1" data-bbox="1333 1207 1408 1353"><tr><td></td></tr><tr><td></td></tr></table>		
9)  <table border="1" data-bbox="690 1466 764 1612"><tr><td></td></tr><tr><td></td></tr></table>			10)  <table border="1" data-bbox="1333 1466 1408 1612"><tr><td></td></tr><tr><td></td></tr></table>		
11)  <table border="1" data-bbox="690 1725 764 1871"><tr><td></td></tr><tr><td></td></tr></table>			12)  <table border="1" data-bbox="1333 1725 1408 1871"><tr><td></td></tr><tr><td></td></tr></table>		